


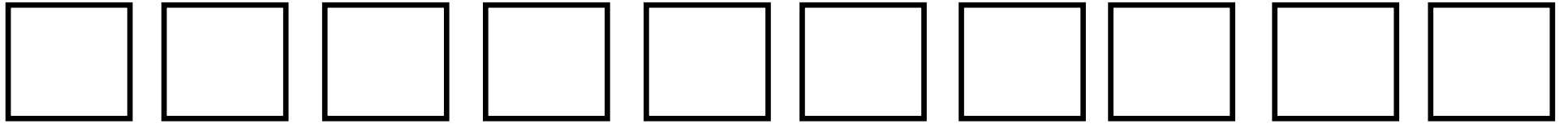
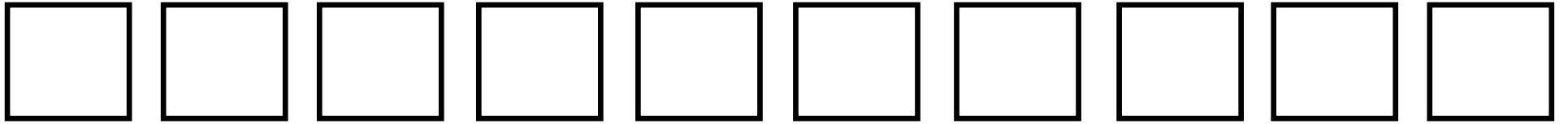


<i>Finish</i>	48	47	46	45	44	43	42	41	40
30	31	32	33	34	35	36	37	38	39
29	28	27	26	25	24	23	22	21	20
10	11	12	13	14	15	16	17	18	19
9	8	7	6	5	4	3	2	1	<i>Start</i>



What is the value of the underlined digit?

- 1) 32
- 2) 32
- 3) 48

Answers:

- 1) 30
- 2) 2
- 3) 40

What is the value of the underlined digit?

- 1) 49
- 2) 12
- 3) 44

Answers:

- 1) 9
- 2) 10
- 3) 40

What number am I thinking of?

- 1) three tens and five ones
- 2) four tens and nine ones
- 3) two tens and three ones

Answers:

- 1) 35
- 2) 49
- 3) 23

What is the number?

- 1) twenty-three
- 2) thirty-seven
- 3) seventeen

Answers:

- 1) 23
- 2) 37
- 3) 17

Find the number which is 1 less than:

- 1) 49
- 2) 22
- 3) 12

Answers:

- 1) 48
- 2) 21
- 3) 11

Find a number which is greater than:

1) 35

2) 47

3) 16

Answers:

1) 36+

2) 48+

3) 17+

Rules:

- Choose which question you will do?
1 = one move, 2 = two moves and 3 = three moves, if answer is correct.
- If your answer is wrong, you move back one square.

